

Name: _____ Date: _____

1. Label the parts of the fraction.

$\frac{1}{2}$

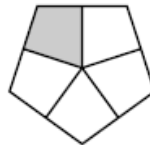
← _____

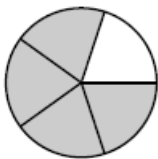
← _____

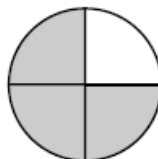
Denominator
Numerator

2. Write the fraction for each picture.







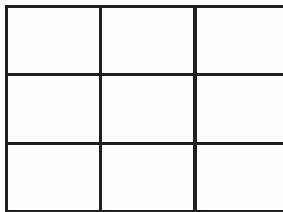




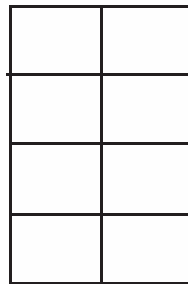


3. Jon and Karen ordered a pizza to share. How many equal pieces will there be? _____

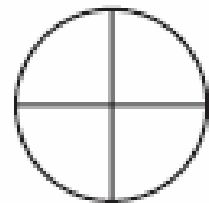
4. Shade each figure to show the fraction.




$$\frac{5}{9}$$



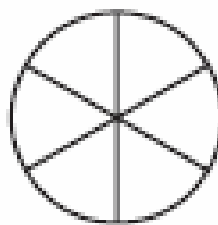
$$\frac{4}{8}$$



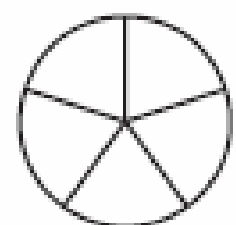
$$\frac{1}{4}$$



$$\frac{1}{3}$$



$$\frac{5}{6}$$



$$\frac{3}{5}$$