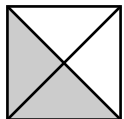
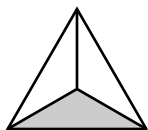


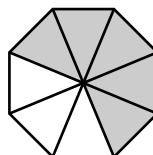
Name _____ Date _____

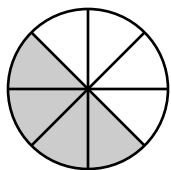
Write the fraction represented by the shaded area of each figure.

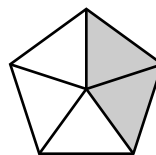


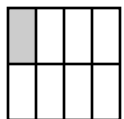


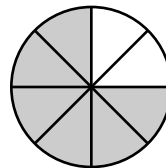


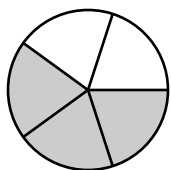


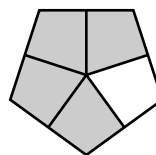






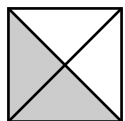




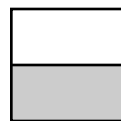


Answer Key

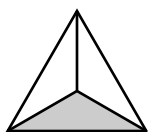
Write the fraction represented by the shaded area of each figure.



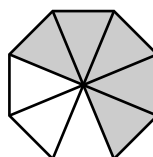
$\frac{2}{4}$ or $\frac{1}{2}$



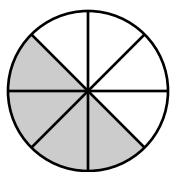
$\frac{1}{2}$



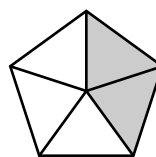
$\frac{1}{3}$



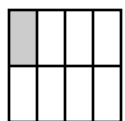
$\frac{5}{8}$



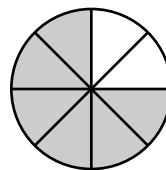
$\frac{4}{8}$ or $\frac{1}{2}$



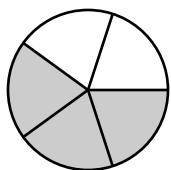
$\frac{2}{5}$



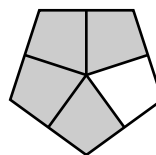
$\frac{1}{8}$



$\frac{6}{8}$ or $\frac{3}{4}$



$\frac{3}{5}$



$\frac{4}{5}$